
Questions 14 – 25 cover material from Exam 3

14. Consider the following electronegativity values:

<u>Element</u>	<u>Electronegativity</u>
Be	1.5
H	2.1
O	3.5
Li	1.0

Which of the following chemical bonds is the most **ionic**?

- A. Be-H
B. Li-O
C. H-H
D. O-H

15. Which of the following ionic compounds has the **largest** lattice energy?

- A. Sr_3N_2
B. RbCl
C. NaCl
D. Mg_3N_2

16. What is the **best** Lewis structure for N_2H_2 ? (Formal charges are **not** shown.)

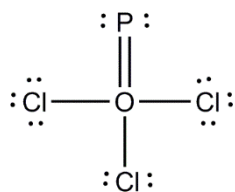
- A. $\text{H}-\ddot{\text{N}}=\ddot{\text{N}}-\text{H}$
B. $\text{H}-\ddot{\text{N}}=\ddot{\ddot{\text{N}}}-\text{H}$
C. $:\ddot{\text{N}}-\text{H}-\text{H}-\ddot{\text{N}}:$
D. $\text{H}-\ddot{\text{N}}-\ddot{\text{N}}-\text{H}$

17. Which bond is the **most** polar?

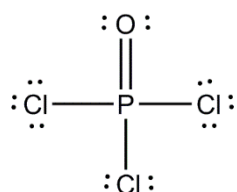
- A. H-F
B. H-Cl
C. H-O
D. H-I
-

18. Which is the **best** Lewis structure for Cl_3PO ? (Formal charges are **not** shown.)

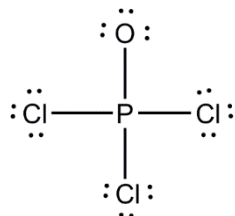
A.



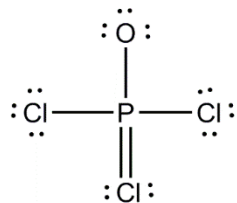
C.



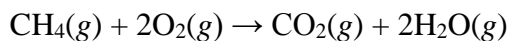
B.



D.



19. Calculate the ΔH_{rxn} for the reaction using average bond energies:



<u>Bond</u>	<u>ΔH_{BE}</u>
C-H	414 kJ/mol
O=O	498 kJ/mol
C=O	799 kJ/mol
O-H	464 kJ/mol

A. -453 kJ

C. +2150 kJ

B. -758 kJ

D. -802 kJ

20. What is the molecular geometry of CH_4 ?

A. square planar

C. trigonal bipyramidal

B. trigonal pyramidal

D. tetrahedral

21. What is the molecular geometry of SF_4 ?

A. trigonal bipyramidal

C. octahedral

B. tetrahedral

D. seesaw

Answer Key:

1. A
2. A
3. C
4. B
5. C
6. D
7. A
8. C
9. D
10. B
11. A
12. B
13. C
14. B
15. D
16. B
17. A
18. C
19. D
20. D
21. D
22. B
23. B
24. B
25. A